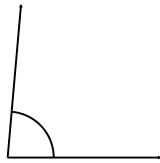


Nombre: _____

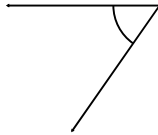
Fecha: _____

Puntuación: _____

1.



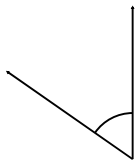
2.



3.



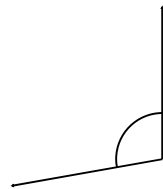
4.



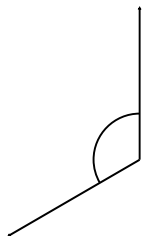
5.



6.



7.



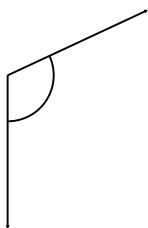
8.



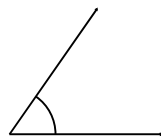
9.



10.



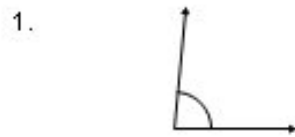
11.



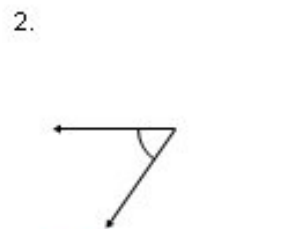
12.



Respuestas



85°



55°



165°



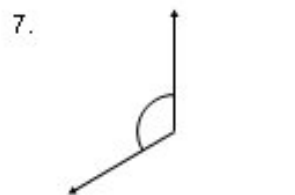
55°



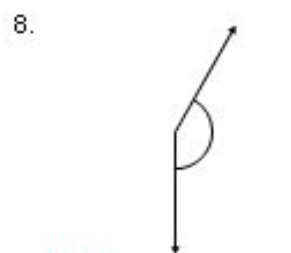
10°



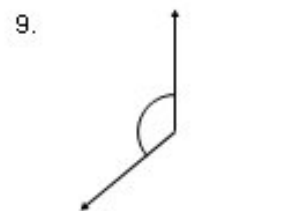
100°



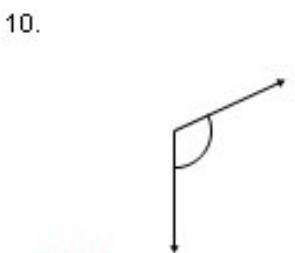
120°



150°



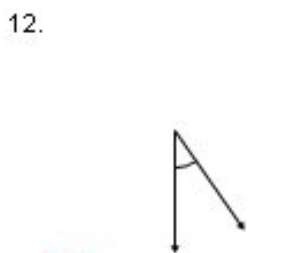
130°



115°



55°



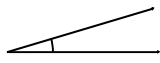
35°

Nombre: _____


Fecha: _____

Puntuación: _____

1.



2.



3.



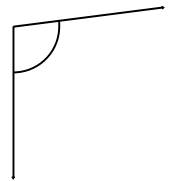
4.



5.



6.



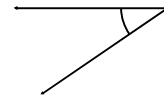
7.



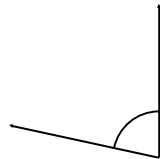
8.



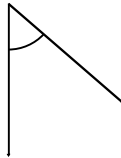
9.



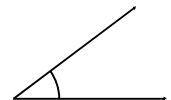
10.



11.



12.



Respuestas

1.



17°

2.



9°

3.



156°

4.



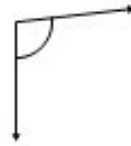
36°

5.



116°

6.



97°

7.



22°

8.



3°

9.



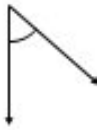
34°

10.



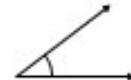
78°

11.



49°

12.



37°